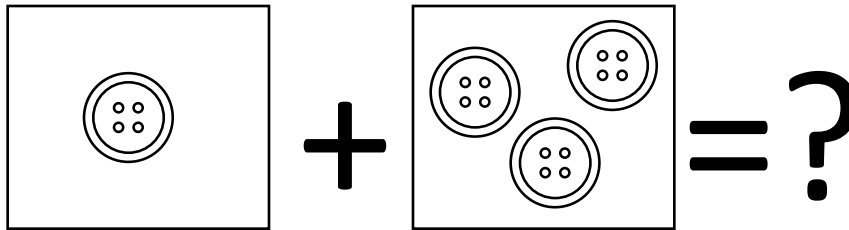


1) 下面哪一個數數值最少?

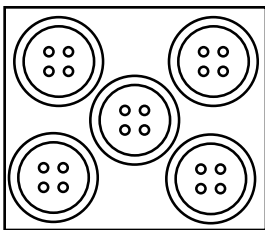
1) Which of the following is the smallest number?

- A. 3    B. 6    C. 2    D. 8

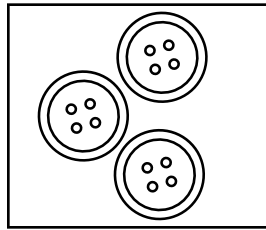
2)



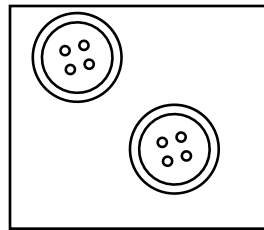
A.



B.



C.



D.

