


1. $123 + 132 - 130 =$

- A. 123
- B. 124
- C. 125
- D. 126

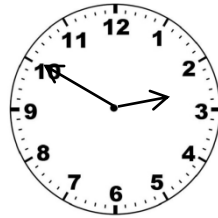
2. 莎莎於下午 3:15 開始閱讀圖書 25 分鐘。以下哪一個時鐘表示她完成之時間。

Sarah starts reading at 3:15 p.m. She finishes reading 25 minutes later. Which clock shows the time Sarah finishes reading? Select the correct answer.

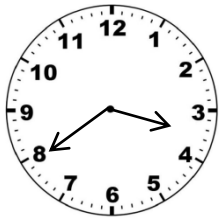
A.



C.



B.



D.

